

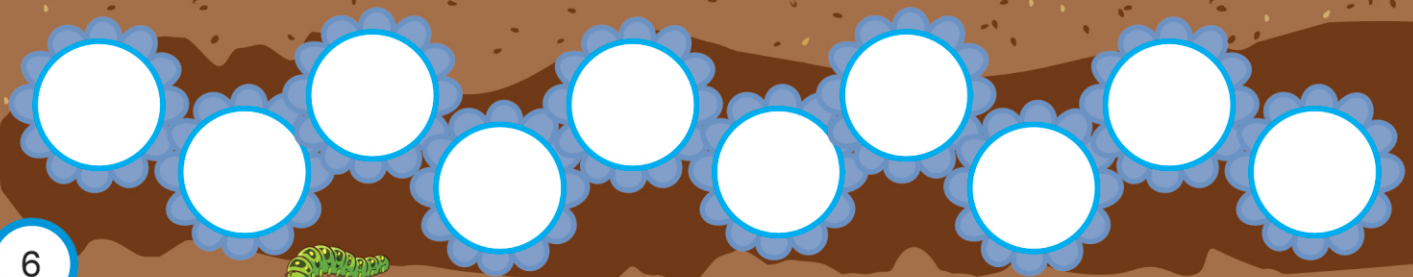

# Number 1 to 20

Panda Class are in the school garden. They are planting lots of flowers and solving math problems along the way.



## Counting to 10

Lion is counting the flowers in each row of flowers. Practice you counting by filling in the missing numbers.



# Write the Numbers




zero

0

Handwriting practice lines for the number 0.

one



1

Handwriting practice lines for the number 1.

two



2

Handwriting practice lines for the number 2.

three



3

Handwriting practice lines for the number 3.

four



4

Handwriting practice lines for the number 4.

five




5

Handwriting practice lines for the number 5.

# Write the Numbers



eleven




11

twelve




12

thirteen



13

fourteen



14

fifteen




15

# Count, Colour, Write



Count



Colour


Write

\_\_\_\_\_

-----


\_\_\_\_\_




\_\_\_\_\_

-----

\_\_\_\_\_




\_\_\_\_\_

-----


\_\_\_\_\_




\_\_\_\_\_

-----


\_\_\_\_\_




\_\_\_\_\_

-----

\_\_\_\_\_




\_\_\_\_\_

-----

\_\_\_\_\_




# Colour how many



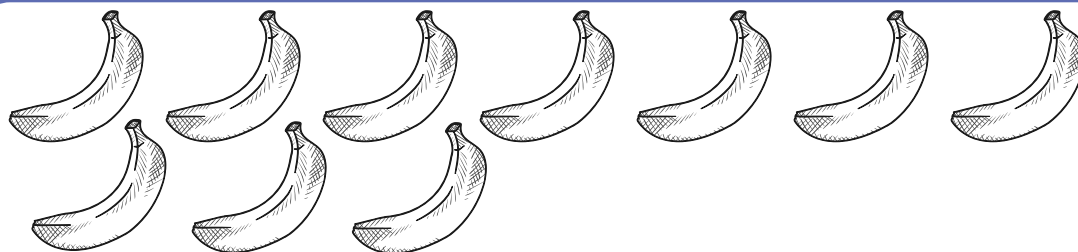
- Read the number. Colour that number of objects.



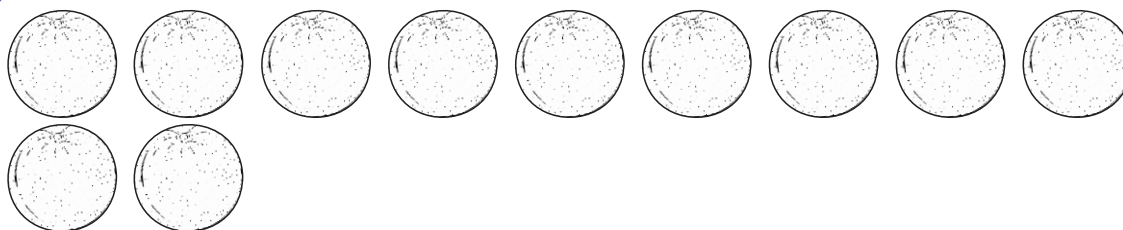
7



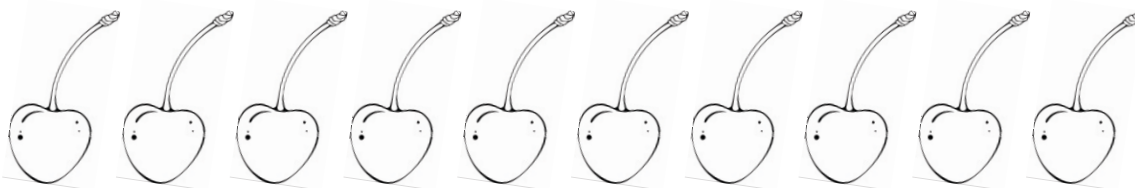
9



6



10



8



# The 4 times table



4	×	1	=	4
4	×	2	=	8
4	×	3	=	12
4	×	4	=	16
4	×	5	=	20
4	×	6	=	24
4	×	7	=	28
4	×	8	=	32
4	×	9	=	36
4	×	10	=	40